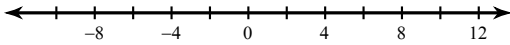


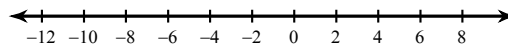
Compound Inequalities

Solve each compound inequality and graph its solution.

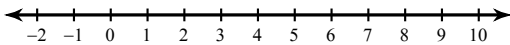
1) $m - 2 < -8$ or $\frac{m}{8} > 1$



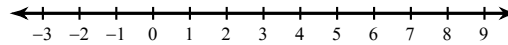
2) $-1 < 9 + n < 17$



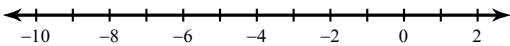
3) $2x < 10$ or $\frac{x}{2} \geq 3$



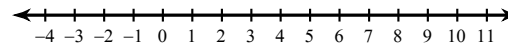
4) $x + 8 \geq 9$ and $\frac{x}{7} \leq 1$



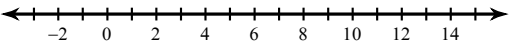
5) $-3 \leq \frac{p}{2} < 0$



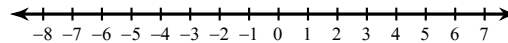
6) $r + 5 \geq 12$ or $\frac{r}{9} < 0$



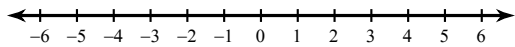
7) $7v - 5 \geq 65$ or $-3v - 2 \geq -2$



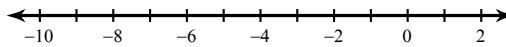
8) $-10b + 3 \leq -37$ or $3b - 10 \leq -25$



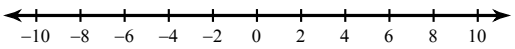
9) $-1 + 5n > -26$ and $7n - 2 \leq 12$



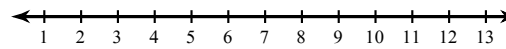
10) $-50 < 7k + 6 < -8$



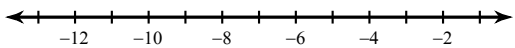
11) $8x + 8 \geq -64$ and $-7 - 8x \geq -79$



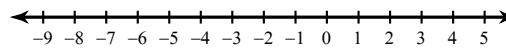
12) $2n + 7 \geq 27$ or $3 + 3n \leq 30$



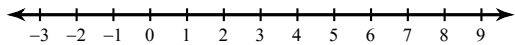
13) $-36 < 3p - 6 < -15$



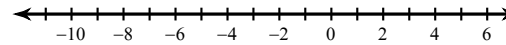
14) $-1 - 10a < -1$ or $10 + 3a \leq -5$



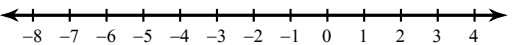
15) $3n + 2 < -2 + 7n$ or $8n - 4 \leq 3n - 4$



16) $8r - 5 \geq 6r - 1$ or $4 + 4r \leq 3r - 3$



17) $5x - 5 > -7x - 5$ or $3x + 5 \leq x - 1$



18) $6 + 7m < 6m - 5$ or $3m - 7 < 5 + 6m$

